

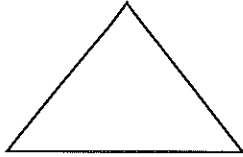


Name :

Worksheet (1)

1) Identify the polygons.

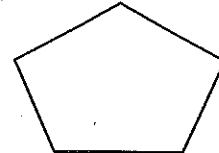
(Rectangle , Triangle , Pentagon)



()



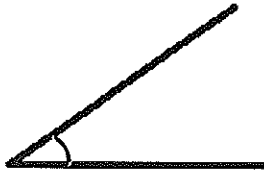
()



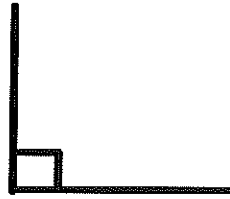
()

2) Identify the following angles as :


(acute , obtuse , right)



()

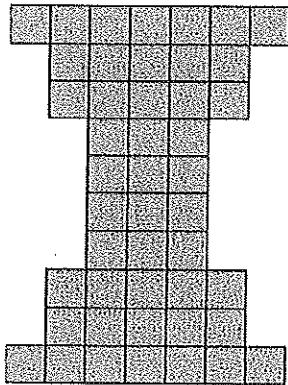


()



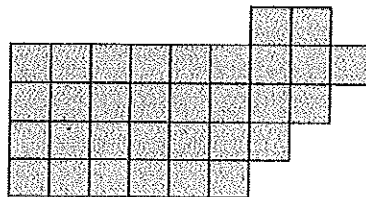
()

3) find the perimeter and area for each figure .




Perimeter = _____ units

Area = _____ sq. units



Perimeter = _____ units

Area = _____ sq. units



Perimeter = _____ units

Area = _____ sq. units

Teacher : Hadees Al-Saleh